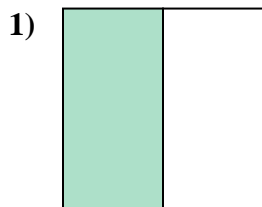
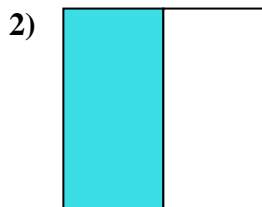
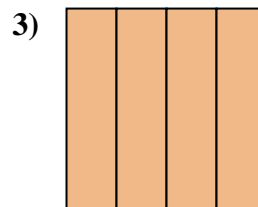


**Determine which letter best describes the shaded portion.****Answers**

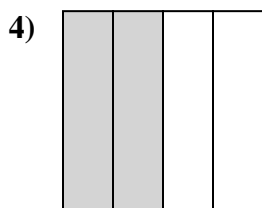
- A. one-quarter
B. three-quarters
C. one-half



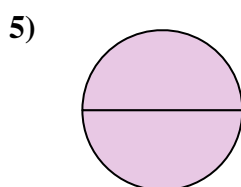
- A. one-fourth
B. one-half
C. four-quarters



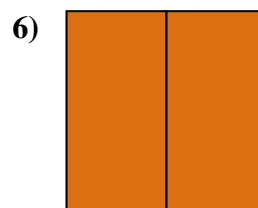
- A. two-halves
B. one-half
C. four-fourths



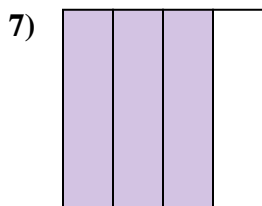
- A. two-fourths
B. two-halves
C. four-fourths



- A. two-quarters
B. two-halves
C. three-quarters



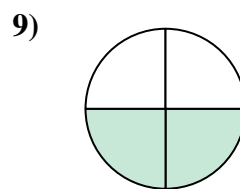
- A. two-fourths
B. two-halves
C. four-fourths



- A. three-fourths
B. four-quarters
C. two-halves

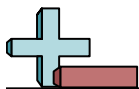


- A. three-quarters
B. two-quarters
C. two-halves

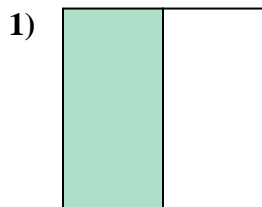


- A. four-quarters
B. one-half
C. two-quarters

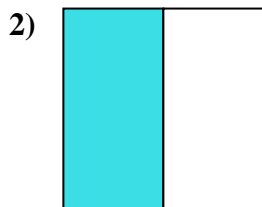
1. _____
2. _____
3. _____
4. _____
5. _____
6. _____
7. _____
8. _____
9. _____



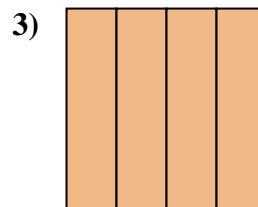
Determine which letter best describes the shaded portion.



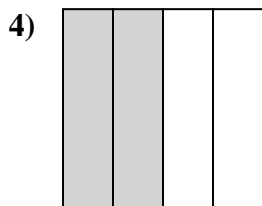
- A. one-quarter
B. three-quarters
C. one-half



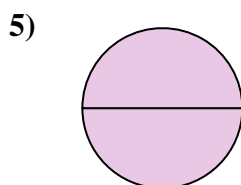
- A. one-fourth
B. one-half
C. four-quarters



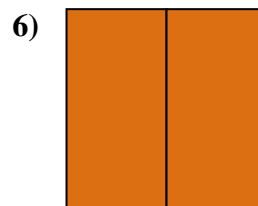
- A. two-halves
B. one-half
C. four-fourths



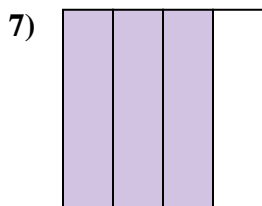
- A. two-fourths
B. two-halves
C. four-fourths



- A. two-quarters
B. two-halves
C. three-quarters



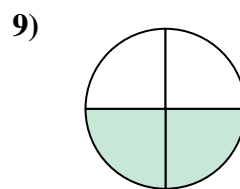
- A. two-fourths
B. two-halves
C. four-fourths



- A. three-fourths
B. four-quarters
C. two-halves



- A. three-quarters
B. two-quarters
C. two-halves



- A. four-quarters
B. one-half
C. two-quarters

Answers1. **C**2. **B**3. **C**4. **A**5. **B**6. **B**7. **A**8. **A**9. **C**